

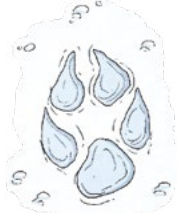



Subtracting Lengths

Snow has fallen overnight and you decide to go for a walk in the nearby woods, first thing in the morning. You discover that many animals have been enjoying the snow too. You spot some different footprints and decide to measure them. This is what you find:

Animal	Length of Footprint	Width of Footprint
cat 	46mm	39mm
rabbit 	105mm	25mm
fox 	86mm	22mm
bird 	22mm	33mm

1. How much longer is the fox's footprint than the cat's?

mm

2. How much longer is the rabbit's footprint than the bird's?

mm

3. How much wider is the cat's footprint than the fox's?

mm

4. What is the difference between the length of the bird's footprint and its width?

mm

5. Which animals have a difference of 64mm between the length of their footprints?

6. Which animals have a difference of 14mm between the width of their footprints?